


Name _____

The American Flag



Count the number of stripes on the American Flag. _____

How many? _____ tens and _____ more

Use groups of ten to find the number of stars on the flag.

How many groups of ten stars are on the flag? _____

How many stars is that? _____

Summer math for incoming second graders

Name _____

Choose one of the “color by number” pages – either the shorts or the fish. Complete the math puzzles in each box to determine which color to use in each area.

A pet store had 15 fish. 6 fish were sold. How many fish does the pet store have now?



BLUE

Madison had 16 sand toys, but lost 3 of them the last time they went to the beach. How many does Madison have now?



many have

RED

Mario had 4 video game figures before his birthday. At his party, he received 4 more. His older sister had 6 that she also gave him. How many does Mario have in all?

GREEN

Jorge has 7 toy cars and 11 toy trucks. How many toy cars and toy trucks does he have altogether?

PURPLE

$$7 + \underline{\quad} = 19$$


BROWN

$$14 - \underline{\quad} = 8$$

BLUE

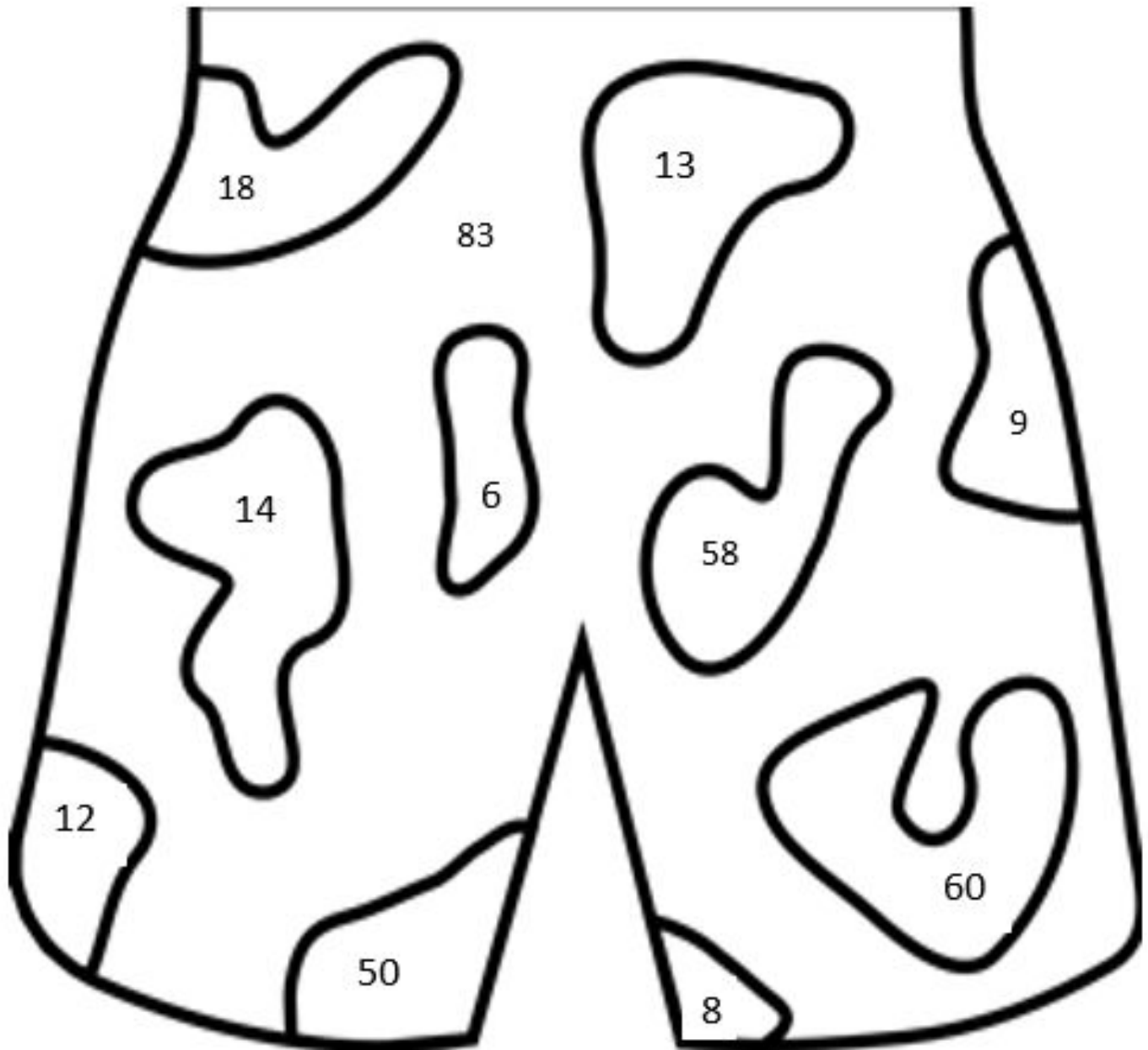
Summer math for incoming second graders

Name _____

<p>10 less than 70</p> <p>PURPLE</p>	<p>Kym and Onna collected 17 empty bottles. Kym collected 9 of the bottles. How many did Onna collect?</p> <p>RED</p>
<p>20 more than 30</p> <p>RED</p>	<p>$78 + 5 = \underline{\hspace{2cm}}$</p> <p>YELLOW</p>
<p>$66 - 8 = \underline{\hspace{2cm}}$</p> <p>ORANGE</p>	 <p>A collection of four line drawings: a kite with a tail, a pair of shorts with a drawstring, a t-shirt, and a pair of sunglasses.</p>

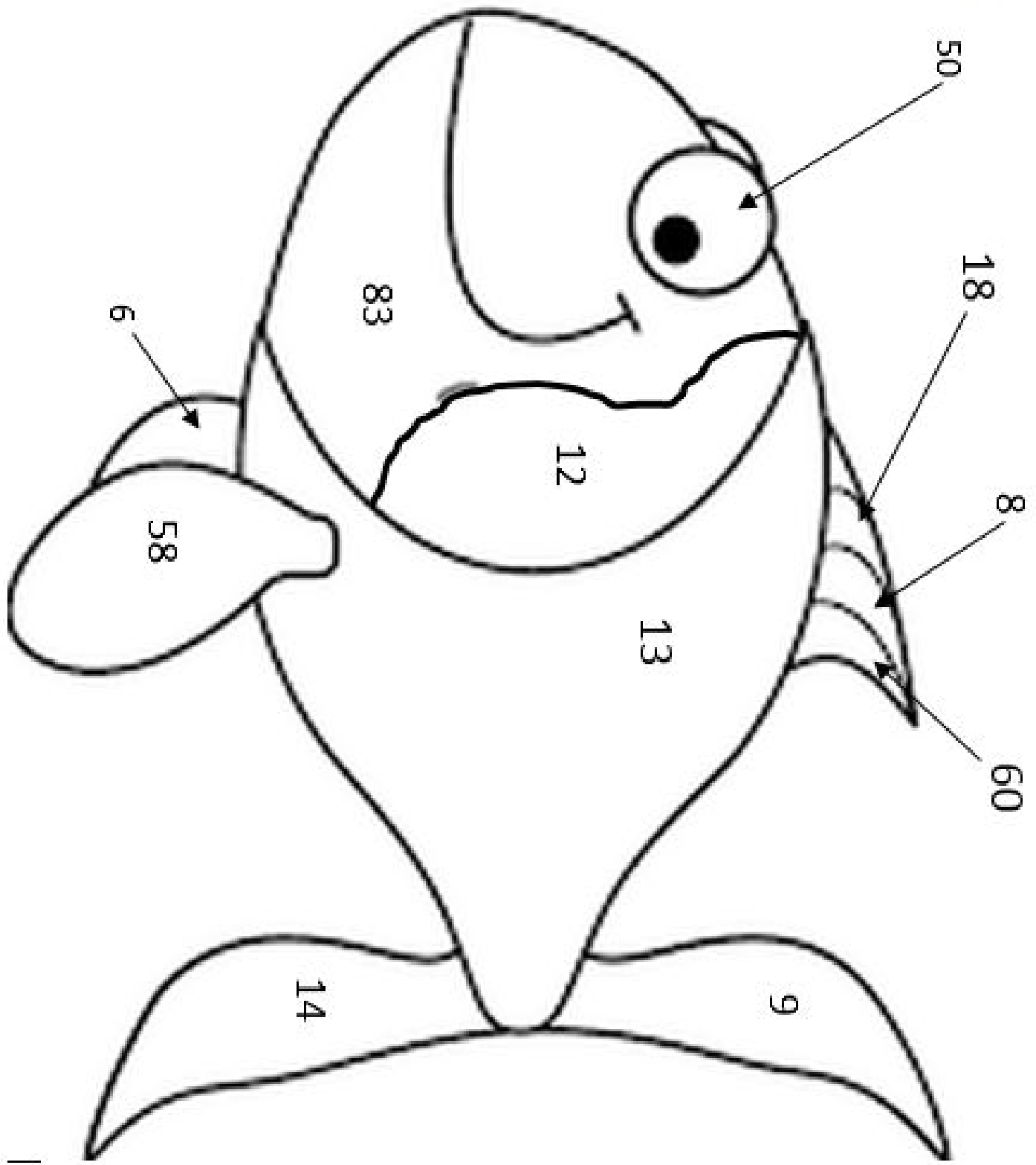
Summer math for incoming second graders

Name _____




Summer math for incoming second graders

Name _____




Summer math for incoming second graders

Name _____






Tell what time it is for each of these clocks. Then tell what you might do at that time.





Name _____

The ice cream store sold a lot of ice cream at lunch time.

Order	How many sold	Total
Sundae 		
Cone 	/	
Soft serve 	/ /	

Which kind of ice cream sold the most?

How many more soft serve ice creams were sold than sundaes?

Write a math story about the ice cream shop.

Summer math for incoming second graders

Name _____


Handwriting practice lines consisting of 15 sets of three horizontal lines (top solid, middle dashed, bottom solid) for writing practice.

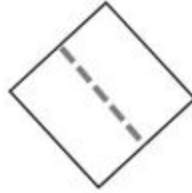


Summer math for incoming second graders

Name _____

Are the shapes divided into halves? Write yes or no.



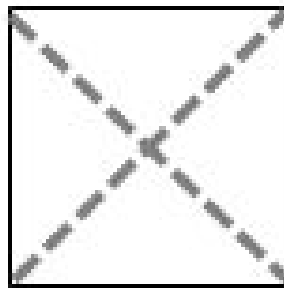









Color 1 fourth of the square.




Color half of the rectangle.



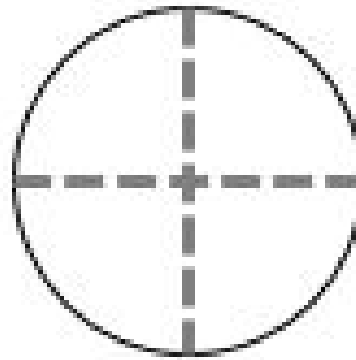
Summer math for incoming second graders

Name _____

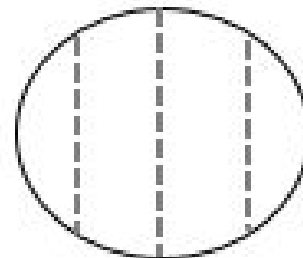
Color half of this square.



Color a quarter of this circle.

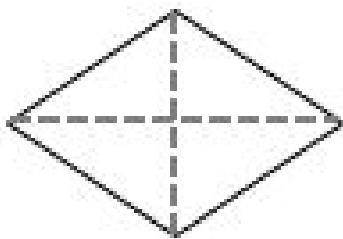


Circle the correct statement.



equal parts

unequal parts




halves

quarters

Summer math for incoming second graders

Name _____

Number in order from 1 to 120. Then follow the directions to color and find the hidden picture.



Color **RED**

15

Color **BROWN**

24 25 26 33

34 35 36 37

43 44 45 46

47 52 53 54

55 56 57 58

Color **YELLOW**

64 65 66 67

68 75 76 77

85 86 87 95

96 97